

MORE OR LESS


KS1 – 2005 Paper 1

1.

19 Draw a ring around the largest number.

201 211 102

 120 210



KS1 – 2007 Paper 1

2.

12

This sentence is correct.

10 is less than **12** ✓

Two of these sentences are correct.

Tick (✓) them.

19 is more than **36**

28 is less than **52**

50 is more than **15**

45 is less than **23**

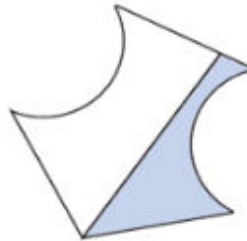
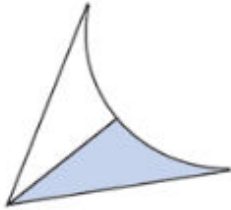
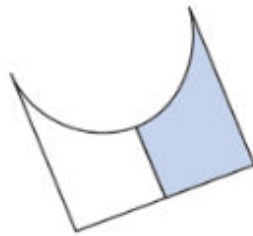
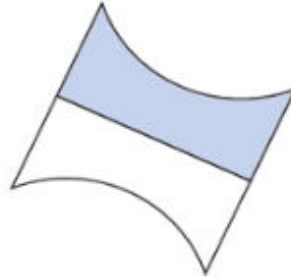
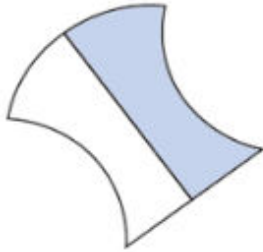
KS1 – 2009 Paper 1

3.

9

One shape is **less than half** blue.

Tick (✓) it.



KS1 – 2009 Paper 1

4.

16

Write numbers in the boxes to make these correct.

One is done for you.

37 is more than

37 is between and

37 has tens










KS1 – 2016 Paper – Reasoning (Second)

5.

8

Match each coin to the correct box.

One has been done for you.

Less than 	More than 
    	



1 mark

13 Look at these numbers.

0 14 50 61

Write each number **once** to make these correct.

>
 >



1 mark